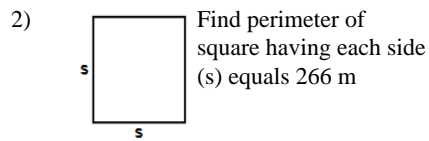
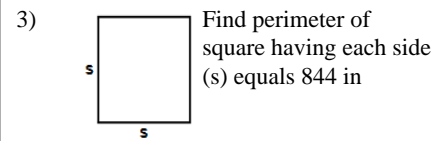


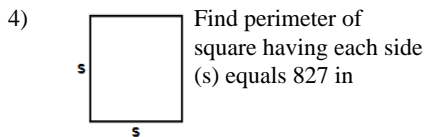
Answer: _____



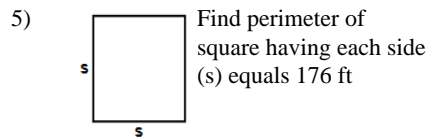
Answer: _____



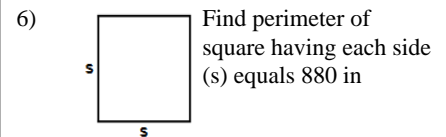
Answer: _____



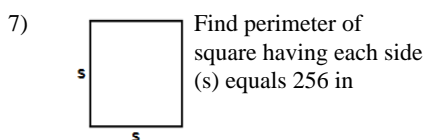
Answer: _____



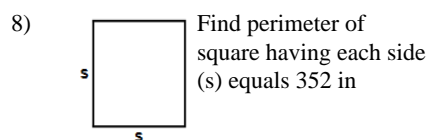
Answer: _____



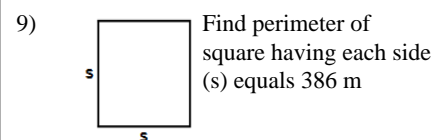
Answer: _____



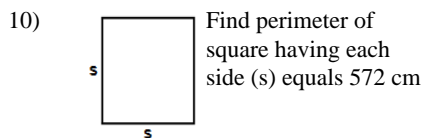
Answer: _____



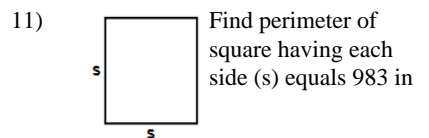
Answer: _____



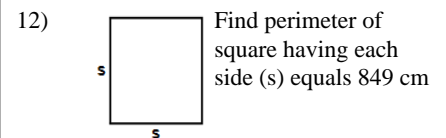
Answer: _____



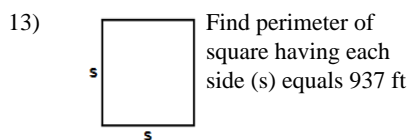
Answer: _____



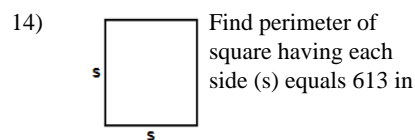
Answer: _____



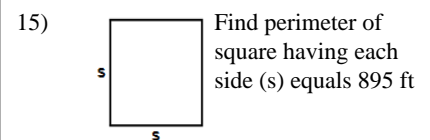
Answer: _____



Answer: _____



Answer: _____



Answer: _____

Name: _____

October 28, 2021



16)



Find perimeter of square having each side (s) equals 548 in

Answer: _____


17)



Find perimeter of square having each side (s) equals 591 in

Answer: _____


18)



Find perimeter of square having each side (s) equals 878 cm

Answer: _____


19)



Find perimeter of square having each side (s) equals 727 in

Answer: _____

20)



Find perimeter of square having each side (s) equals 116 in

Answer: _____

Total: ____ / 20

Name: _____

October 28, 2021

Sr: 28102021-2402

MATHS WORKSHEET

GENERATOR

11-PLUS
SATS
GCSES



Answers:

- | | | | | | | |
|------------|------------|------------|------------|------------|------------|------------|
| 1) 2360cm | 2) 1064m | 3) 3376in | 4) 3308in | 5) 704ft | 6) 3520in | 7) 1024in |
| 8) 1408in | 9) 1544m | 10) 2288cm | 11) 3932in | 12) 3396cm | 13) 3748ft | 14) 2452in |
| 15) 3580ft | 16) 2192in | 17) 2364in | 18) 3512cm | 19) 2908in | 20) 464in | |